



Even MORE Rhythm!





Name: _____



1. Write two notes of equal value:


a)  = ___ + ___

b)  = ___ + ___

c)  = ___ + ___

d)  = ___ + ___

e)   = ___ + ___

f)  = ___ + ___

2. Identify the time signature of each example below as 2/4 time, 3/4 time, or 4/4 time.



Time signature is _____



Time signature is _____



Time signature is _____



Time signature is _____

3. Draw bar lines in each example below.

