


# More Notes & Rests

Name: \_\_\_\_\_

1. A dot placed after a note increases its value by 50%. How many beats are the following notes worth?



a)  = \_\_\_\_\_ beats



b)  = \_\_\_\_\_ beats





c)  = \_\_\_\_\_ beats





d)  = \_\_\_\_\_ beats


2. Write one REST equal to the following:




a)   = \_\_\_\_\_



b)   = \_\_\_\_\_




c)     = \_\_\_\_\_

d)     = \_\_\_\_\_

e)  = \_\_\_\_\_

f)    = \_\_\_\_\_

g)   = \_\_\_\_\_





h)    = \_\_\_\_\_

3. Answer the following with one rest:

a)  +  = \_\_\_\_\_

b)  +  = \_\_\_\_\_

c)  +  = \_\_\_\_\_

d)  +  +  +  = \_\_\_\_\_

